

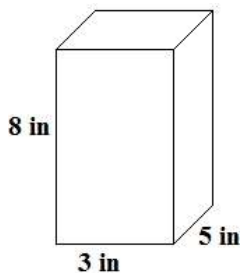
Apprenticeship Math 12
PRACTICE QUIZ
S.A. of Rectangular and Triangular Prisms

Name: _____

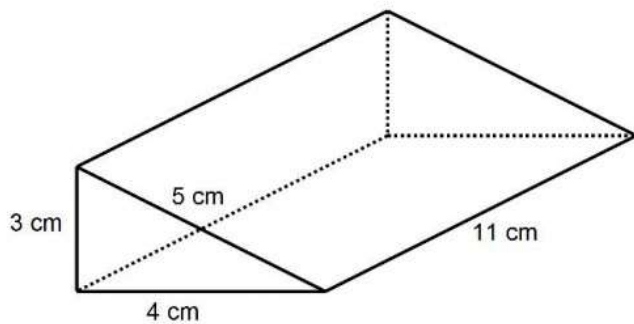
Date: _____

Find the surface area of each object. Show your work, round your answers to the nearest hundredth, and don't forget units!

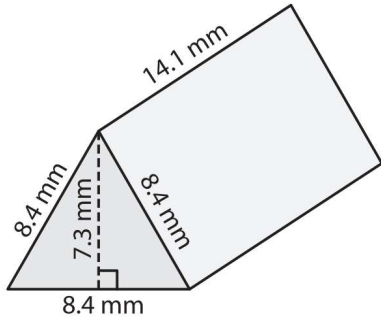
1.



2.



3.



4.

