

Name: _____

Date: _____

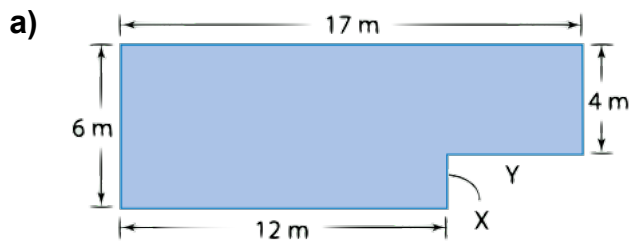
Section 2.3 – Determining Missing Dimensions

1. Do Question #4 on page 56 in the textbook.

a) $A =$ _____ $B =$ _____

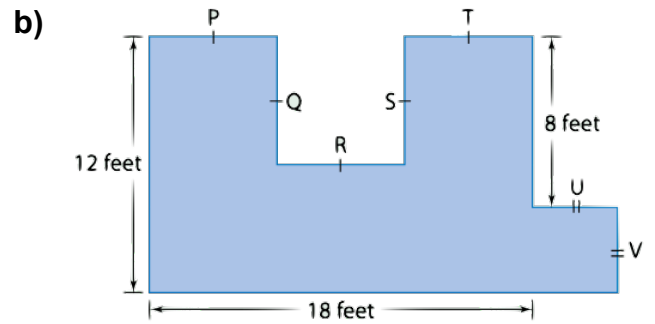
b) $F =$ _____

2. Determine the missing dimensions.



$X =$ _____

$Y =$ _____



$P =$ _____

$Q =$ _____

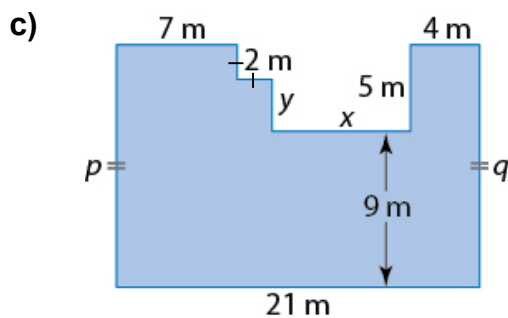
$R =$ _____

$S =$ _____

$T =$ _____

$U =$ _____

$V =$ _____

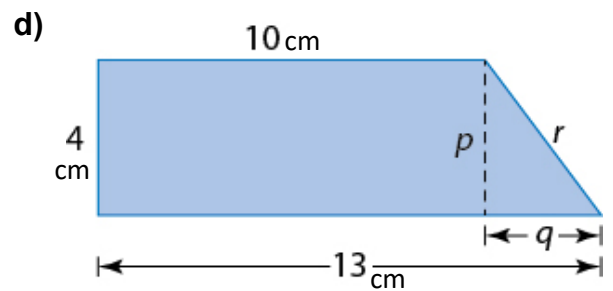


$p =$ _____

$q =$ _____

$x =$ _____

$y =$ _____



$p =$ _____

$q =$ _____

$r =$ _____